

nombre




curso

fecha



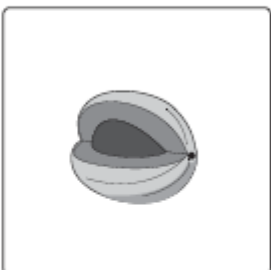
ACTIVIDADES: COMPARAR NÚMEROS MENORES A 10 A

1. Marque con una cruz donde hay **más** elementos en cada fila.


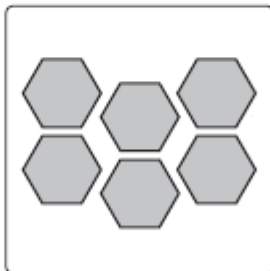

a)

		
-----------------------------------------------------------------------------------	-----------------------------------------------------------------------------------	-------------------------------------------------------------------------------------

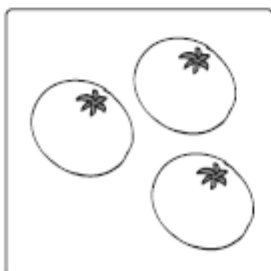


b)

		
------------------------------------------------------------------------------------	------------------------------------------------------------------------------------	--------------------------------------------------------------------------------------

c)

		
-------------------------------------------------------------------------------------	-------------------------------------------------------------------------------------	---------------------------------------------------------------------------------------

d)

		
-------------------------------------------------------------------------------------	-------------------------------------------------------------------------------------	---------------------------------------------------------------------------------------

2. Marque con una cruz el número **mayor**, en cada fila:

a)

	5	2	1	4	
--	---	---	---	---	--

b)

	3	4	0	1	
--	---	---	---	---	--

c)


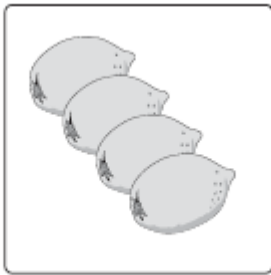
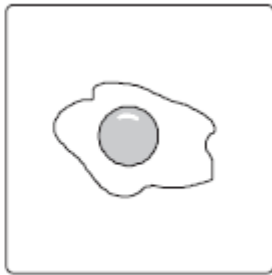
	1	2	5	4	
--	---	---	---	---	--

d)


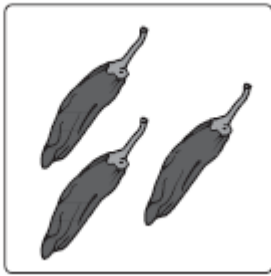
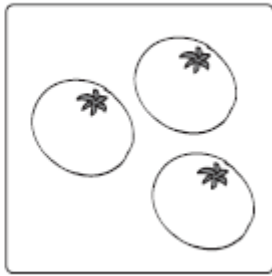
	0	1	2	3	
--	---	---	---	---	--

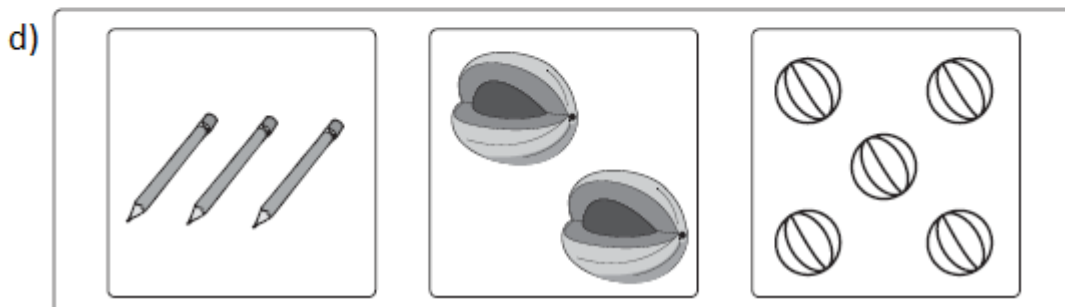

3. Marque con una cruz donde hay **menos** elementos en cada fila.

a)

		
-------------------------------------------------------------------------------------	--------------------------------------------------------------------------------------	---------------------------------------------------------------------------------------

b)

		
-------------------------------------------------------------------------------------	--------------------------------------------------------------------------------------	---------------------------------------------------------------------------------------



4. Marque con una cruz el número que es **menor**, en cada fila.

a)

	5	2	1	4
--	---	---	---	---

b)

	3	4	0	1
--	---	---	---	---

c)

	1	2	5	4
--	---	---	---	---

d)

	0	1	2	3
--	---	---	---	---