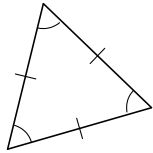
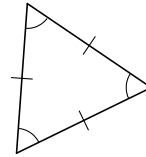


## Pauta: Clasificación de triángulos

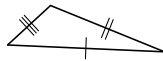
Clasifique los siguientes triángulos según la medida de sus lados.



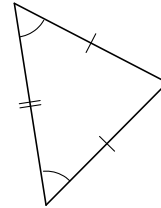
equilátero



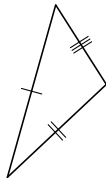
equilátero



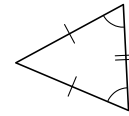
escaleno



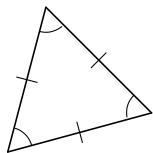
isósceles



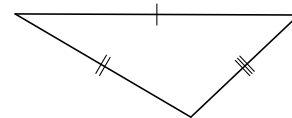
escaleno



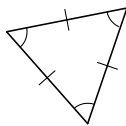
isósceles



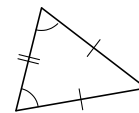
equilátero



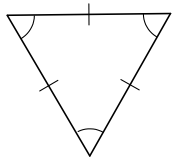
escaleno



equilátero



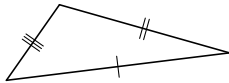
isósceles



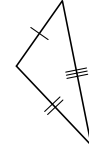
equilátero



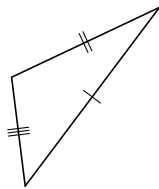
escaleno



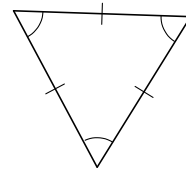
escaleno



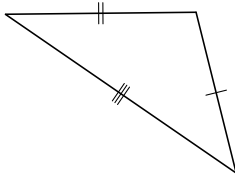
escaleno



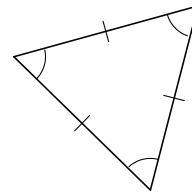
escaleno



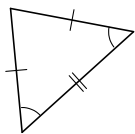
equilátero



escaleno



equilátero



Isósceles



isósceles