


nombre _____

curso _____

fecha _____


COMPARACIÓN DE FRACCIONES

(Fracciones con el mismo numerador)

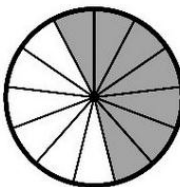


$\frac{4}{5}$

>

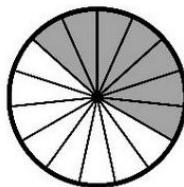


$\frac{4}{14}$




$\frac{7}{13}$

○




$\frac{7}{15}$

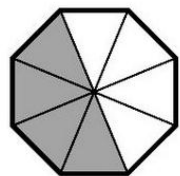


$\frac{2}{11}$

○

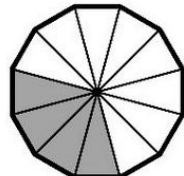


$\frac{2}{20}$

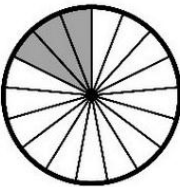


$\frac{4}{8}$

○

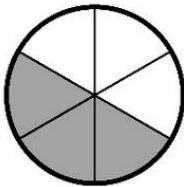


$\frac{4}{12}$




$\frac{3}{17}$

○



$\frac{3}{6}$

Escribe el símbolo < , > según corresponda

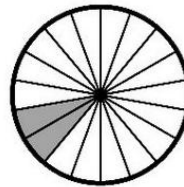


$\frac{3}{19}$

○

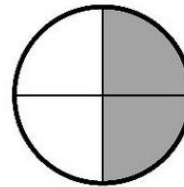


$\frac{3}{7}$




$\frac{2}{18}$

○




$\frac{2}{4}$



$\frac{1}{10}$

○



$\frac{1}{9}$



www.actiludis.com

Jose M. de la Rosa S.